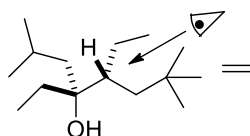
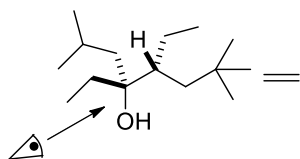
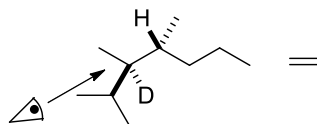
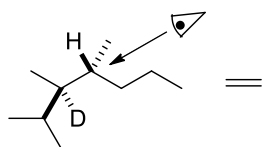


Worksheet on Newman and wedge dash projections Key
 I would suggest doing the book problems first then attempting these.

1. Draw the Newman projection the wedge and dash projection.



2. Draw the wedge dash projection from the Newman projection and try and name the compounds from the Newman projection and from the wedge dash projection.

